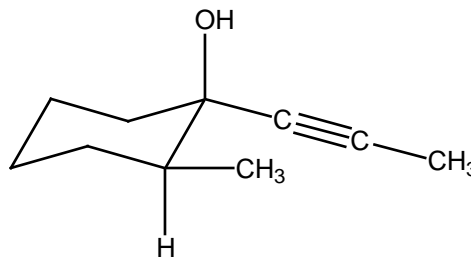


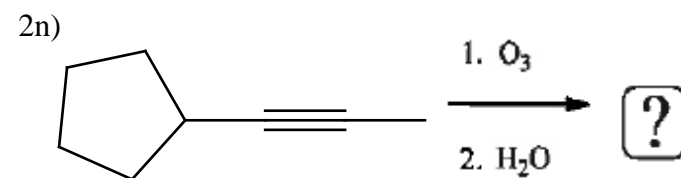
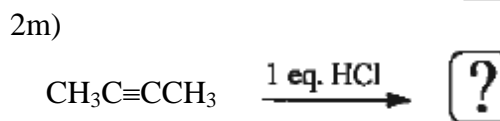
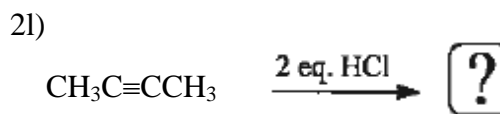
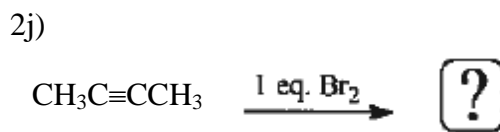

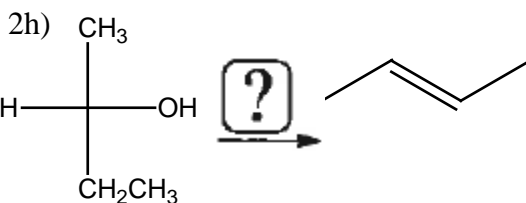
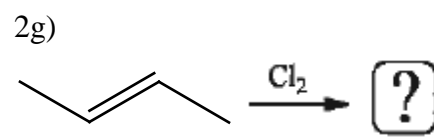
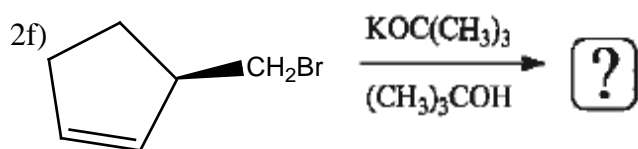
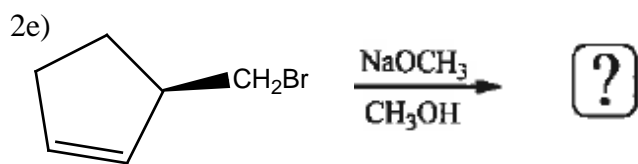
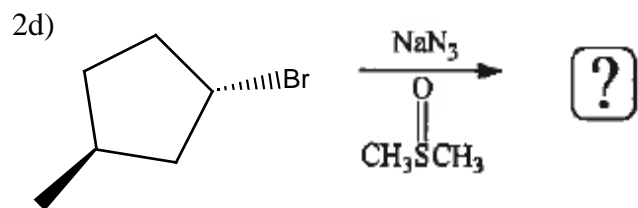
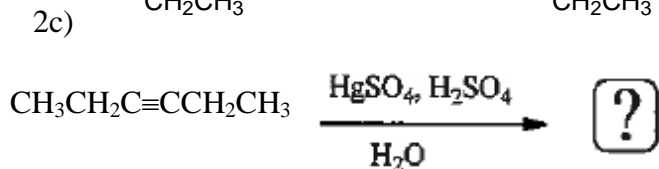
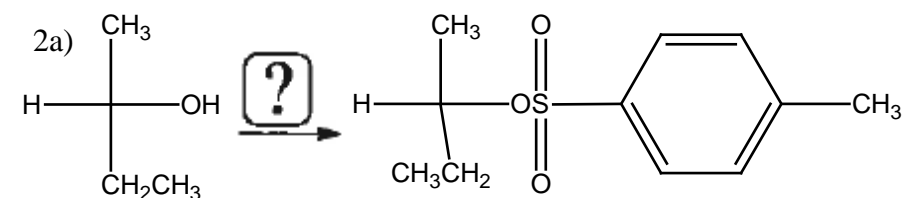
Organic Chemistry Practice Problems

Organic Chemistry I Practice Set #11 (Chapters 8-10 – Carey)

1) For the following compound, provide a name. Be sure to identify stereoisomers properly.

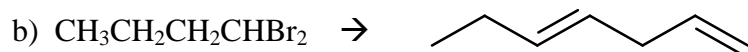
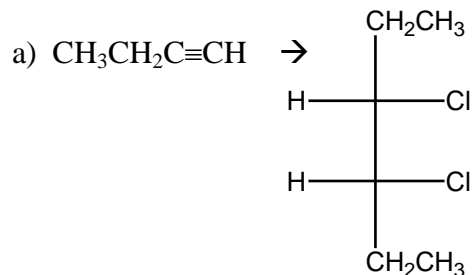


2) Fill in what is missing. Either give all of the missing reagents to complete the reaction or give a structural formula for the *major organic product(s)*. Show stereoisomers properly if necessary. If no reaction occurs, write *N.R.* *If the product is a racemic mixture, show both structures.*

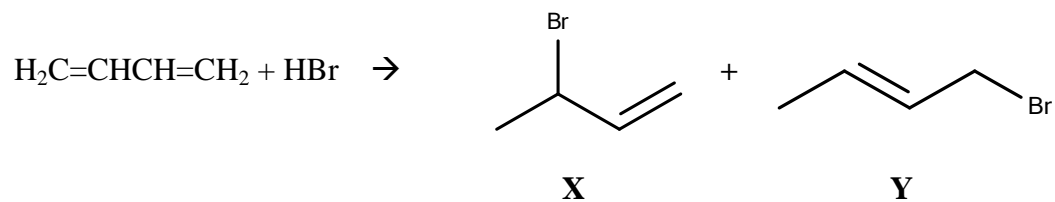


Organic Chemistry Practice Problems

- 3) Provide an efficient multistep synthesis for each of the following conversions of the given starting material into product. For each transformation, give all necessary reagents and catalysts and give a structural formula of the organic product. Show stereochemistry appropriately when necessary.



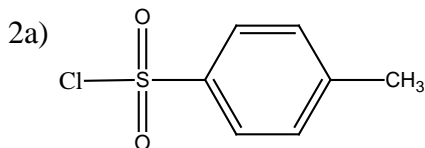
- 4) Using arrows to show the flow of electrons, write a stepwise mechanism for the reaction shown below. For your mechanism, concisely explain why $X = 81\%$ yield and $Y = 19\%$ yield when the reaction is performed at $-80\text{ }^\circ\text{C}$ and why $X = 44\%$ yield and $Y = 56\%$ yield when the reaction is performed at room temperature ($25\text{ }^\circ\text{C}$).



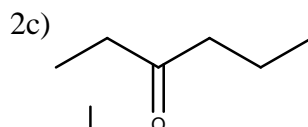
Organic Chemistry Practice Problems

Organic Chemistry I Answers to Practice Set #11 (Chapters 8-10 – Carey)

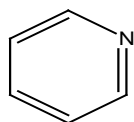
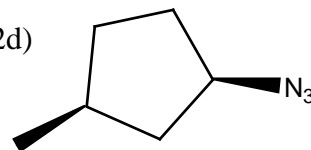
1) (1R,2S)-2-methyl-1-propynylcyclohexanol



2b) PBr_3

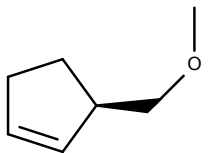


2d)

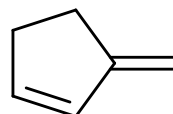


pyridine

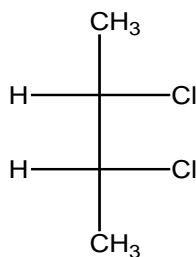
2e)



2f)



2g)

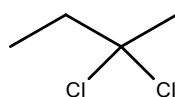


2h) H_2SO_4 , heat

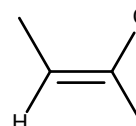
2i) Na , NH_3

2k) H_2O , H_2SO_4 , HgSO_4

2l)



2m)



2n)

